

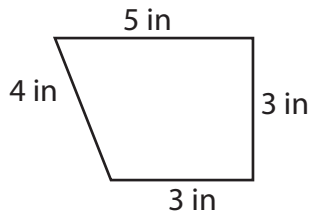
Name _____

Date _____

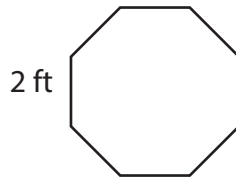
Review: Geometry & Measurement



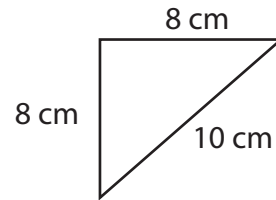
Find the **perimeter**.



1. 15 in

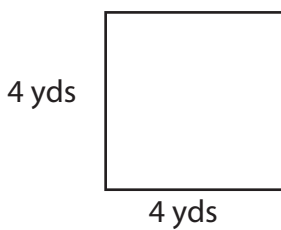


2. 16 ft

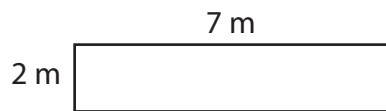


3. 26 cm

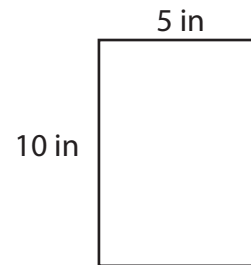
Find the **area**.



1. 16 yds²

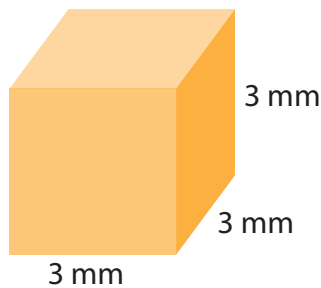


2. 14 m²




3. 50 in²

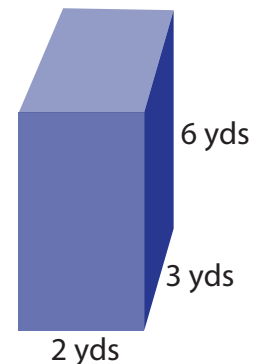
Find the **volume**.



1. 27 mm³



2. 72 ft³



3. 36 yds³

Convert these units of measurement.

2 ft = 24 in.

4 qt = 8 pt

2 lbs = 32 oz

4 yds = 12 ft.

3 L = 3000 ml

2000 mg = 2 g

7 m = 700 cm

3 pt = 6 c

4 km = 4000 m