



Counting Area

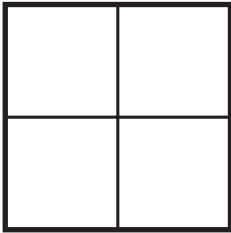
Find the areas below by counting the square units and write down the answers. Then, draw square units to make the area. See the example.




= 1 square unit



= 3 square units




= 4 square units



= 6 square units



= 4 square units



= 4 square units

Now draw 7 square units of area and 8 square units of area.

