


Name _____

Date _____


Funny Clock Faces

ANSWERS


Write the time each clock shows on the lines below each one.




7:30



8:30



5:30



1:30



3:30



12:30




2:30



6:30



11:30



4:30