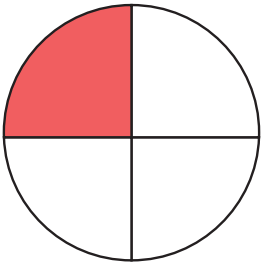


ANSWERS Fractions

What fraction does the colored area show?
Color in the bubble next to the correct answer.

1.



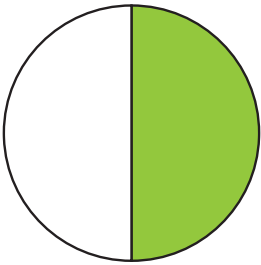
$\frac{1}{2}$

$\frac{3}{4}$

$\frac{1}{4}$

$\frac{1}{3}$

2.



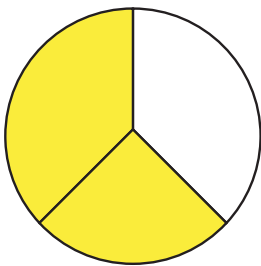
$\frac{2}{3}$

$\frac{2}{4}$

$\frac{1}{4}$

$\frac{1}{2}$

3.



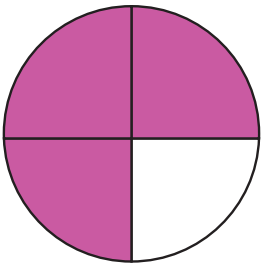
$\frac{3}{4}$

$\frac{1}{2}$

$\frac{2}{3}$

$\frac{1}{3}$

4.



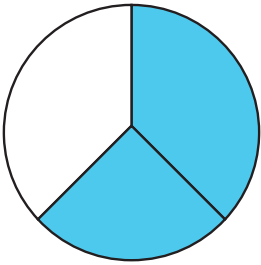
$\frac{2}{4}$

$\frac{3}{4}$

$\frac{1}{3}$

$\frac{1}{4}$

5.



$\frac{3}{4}$

$\frac{1}{3}$

$\frac{2}{4}$

$\frac{2}{3}$