

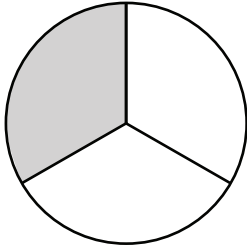
Name: _____

Date: _____

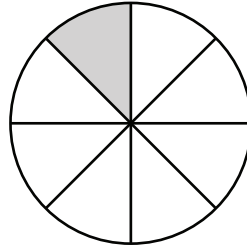
Fraction of a Whole Check-in



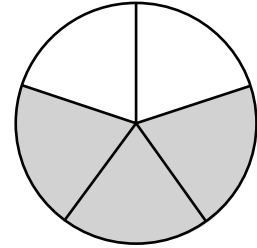
Write the **shaded** fraction of each shape below.



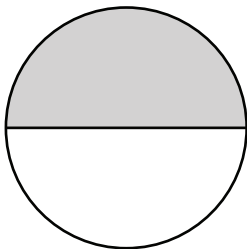
$$\frac{1}{3}$$



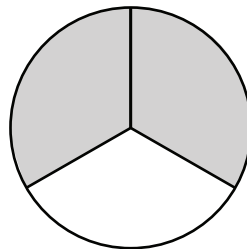
$$\frac{1}{8}$$



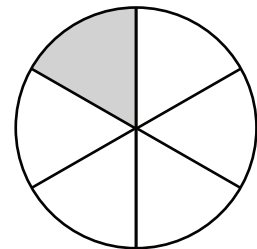
$$\frac{3}{5}$$



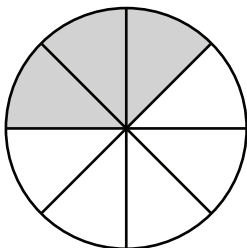
$$\frac{1}{2}$$



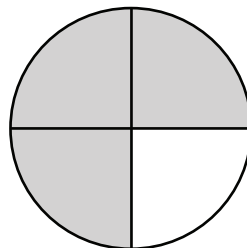
$$\frac{2}{3}$$



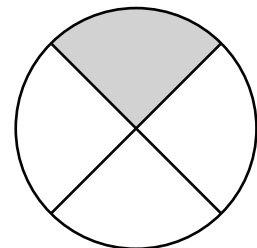
$$\frac{1}{6}$$



$$\frac{3}{8}$$



$$\frac{3}{4}$$



$$\frac{1}{4}$$