

Name _____

Date _____

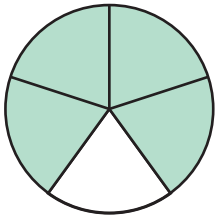
Answer Key

FRACTION FUNDAMENTALS:

Writing Fractions


Directions: Write the fraction for each shaded area. The first one has been done for you.

1.



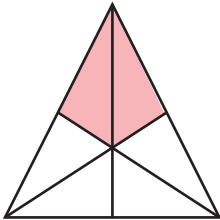
$$\frac{4}{5}$$

2.



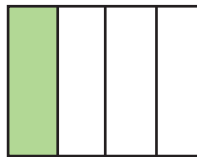
$$\frac{5}{6}$$

3.




$$\frac{2}{6}$$

4.



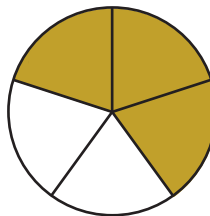
$$\frac{1}{4}$$

5.



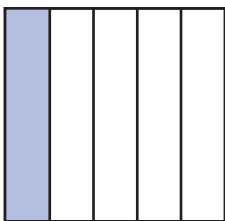
$$\frac{2}{7}$$

6.




$$\frac{3}{5}$$

7.



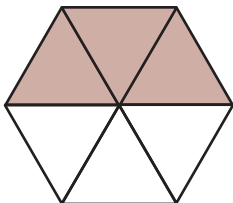
$$\frac{1}{5}$$

8.




$$\frac{7}{8}$$

9.



$$\frac{3}{6}$$

10.



$$\frac{5}{7}$$