


Name _____

Date _____

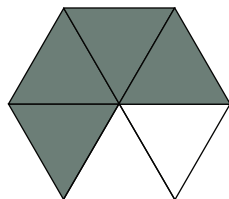
Answer Key

FRACTION REVIEW

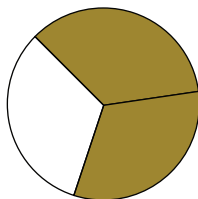
Part 1. Write the fraction the shaded parts of each shape represent.



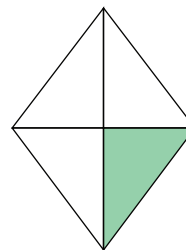
$$\frac{2}{5}$$



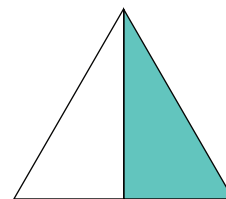
$$\frac{4}{6}$$



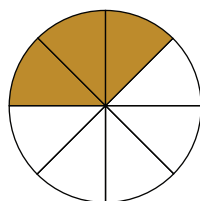
$$\frac{2}{3}$$




$$\frac{1}{4}$$



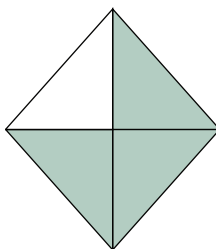
$$\frac{1}{2}$$




$$\frac{3}{8}$$



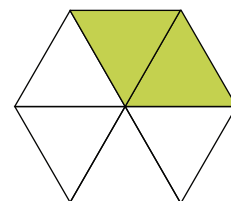
$$\frac{3}{6}$$



$$\frac{3}{4}$$



$$\frac{3}{4}$$



$$\frac{2}{6}$$

Part 2. Match the fraction pairs. Draw a line between the fractions that show the same value.

