

Name: _____

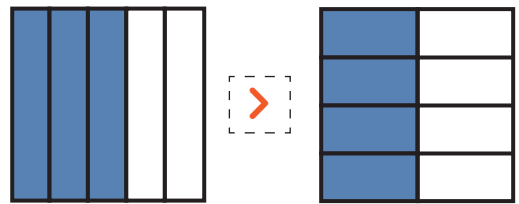
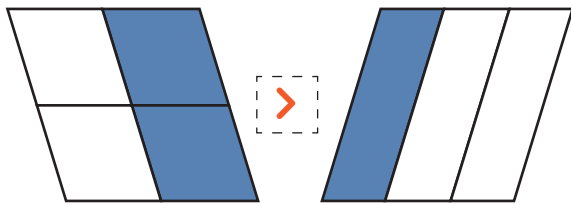
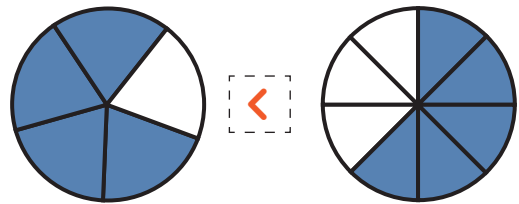
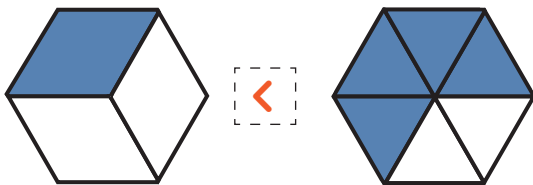
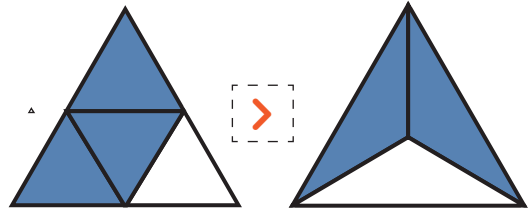
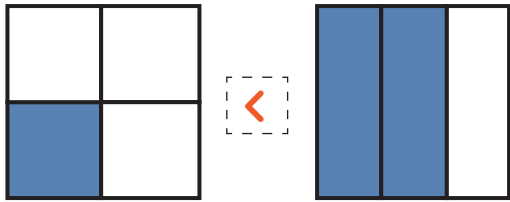
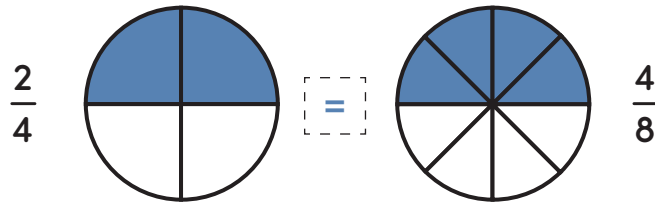
Date: _____

Answer Key

Comparing Fractions

For each problem below, write less than (<), greater than (>), or equal to (=) in the space provided to compare the fractions represented by the shapes.

EXAMPLE:



Rewrite the fractions below in order from smallest to largest.

$\frac{5}{8}$ $\frac{3}{4}$ $\frac{1}{2}$ $\frac{7}{8}$ $\frac{1}{4}$
 $\frac{1}{4}$ $\frac{1}{2}$ $\frac{5}{8}$ $\frac{3}{4}$ $\frac{7}{8}$