

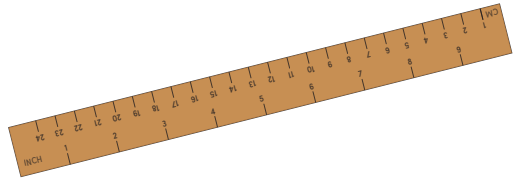
Name _____

Date _____

Answer Key

Determining Relative Length:

Shortest to Longest



Number each set of three items from 1 to 3, 1 being the shortest and 3 being the longest. Write the numbers in the boxes below each item.

Hanger



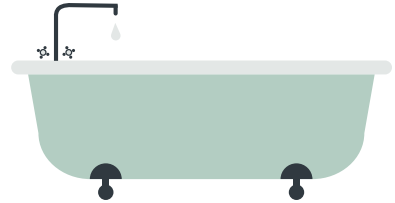
2

Stapler



1

Bathtub




3

Spoon




1

Baseball bat



3

Toaster



2

Key




1

Sunglasses



2

Bed



3