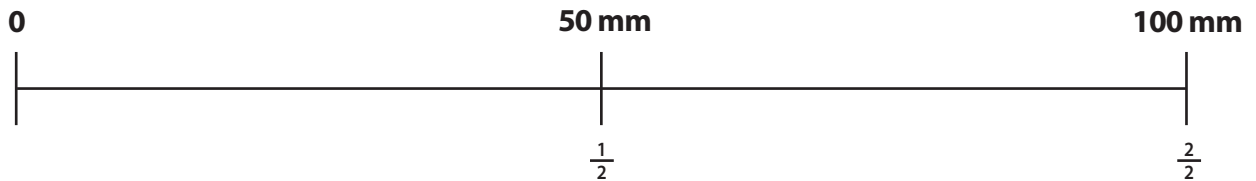


Finding Fraction Equivalents for Metric Measurements

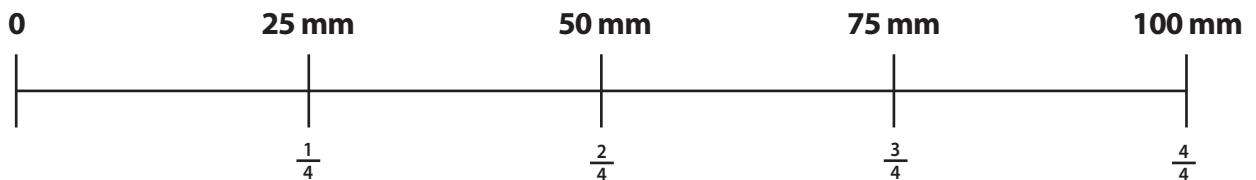
ANSWERS

1) What is $\frac{1}{2}$ of 100 mm?



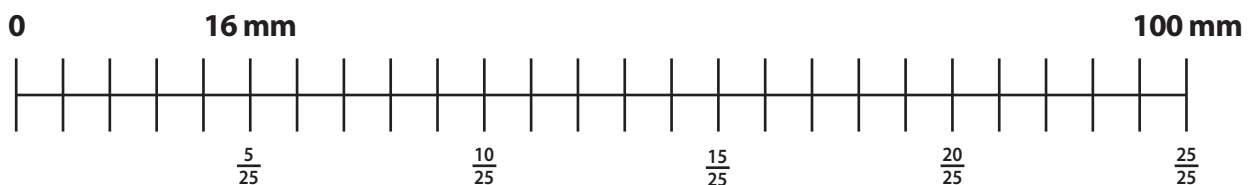
ANSWER: $\frac{1}{2}$ of 100 mm = 50 mm

2) What is $\frac{3}{4}$ of 100 mm?



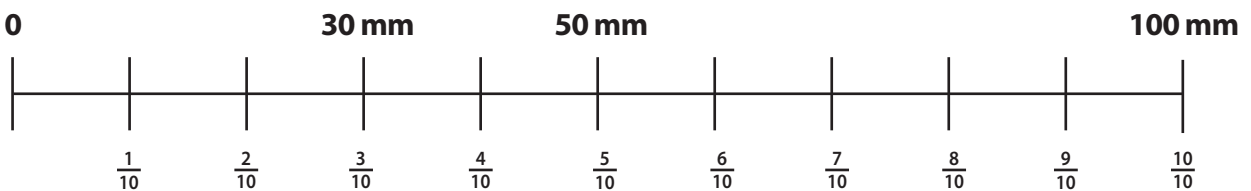
ANSWER: $\frac{3}{4}$ of 100 mm = 75 mm

3) What is $\frac{4}{25}$ of 100 mm?



ANSWER: $\frac{4}{25}$ of 100 mm = 16 mm

4) What is $\frac{3}{10}$ of 100 mm?



ANSWER: $\frac{3}{10}$ of 100 mm = 30 mm