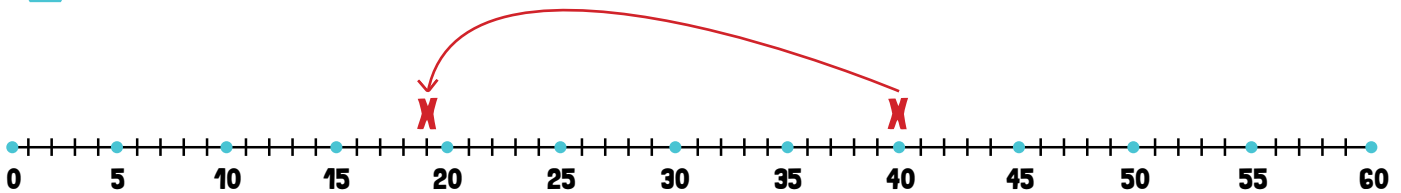


# FINDING THE MISSING NUMBER IN A NUMBER SENTENCE

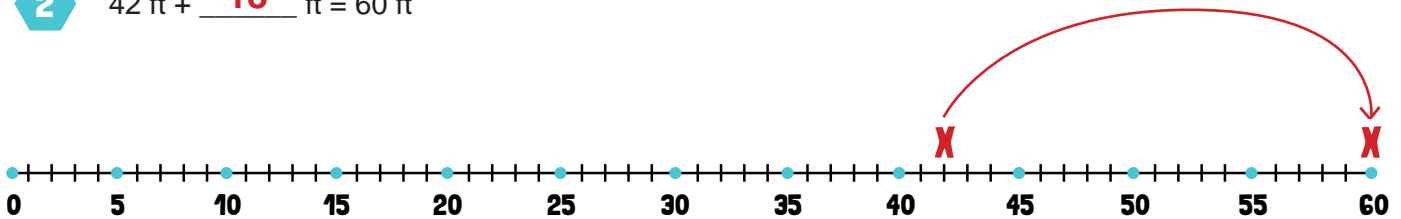
## Mixed Review

Directions: Use the number lines to help you solve for the missing numbers in these equations.

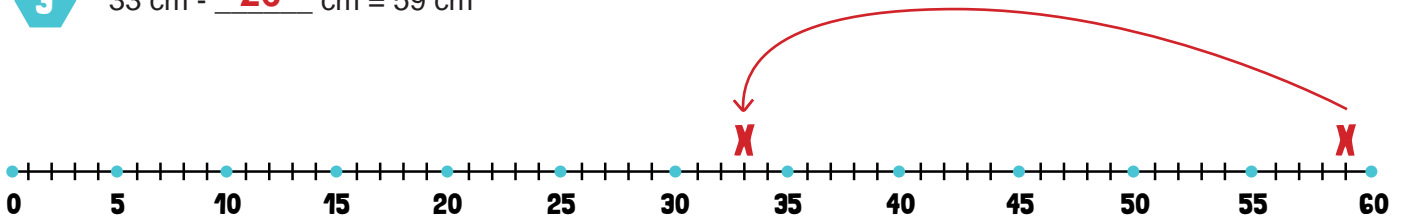
1  $40\text{ y} - \underline{21}\text{ y} = 19\text{ y}$



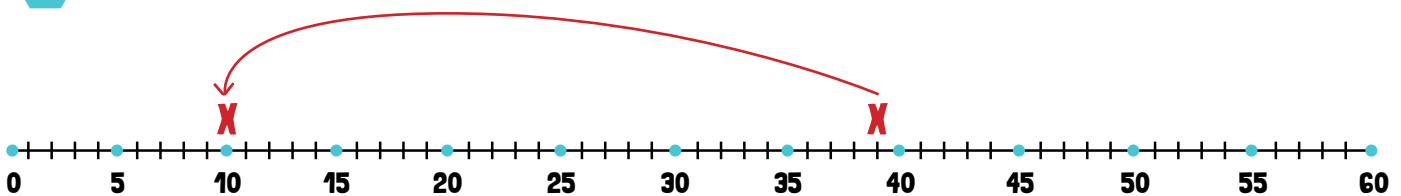
2  $42\text{ ft} + \underline{18}\text{ ft} = 60\text{ ft}$



3  $33\text{ cm} - \underline{26}\text{ cm} = 59\text{ cm}$



4  $39\text{ in} - \underline{29}\text{ in} = 10\text{ in}$



5  $38\text{ km} + \underline{21}\text{ km} = 59\text{ km}$

