


Name _____

Date _____

Find the Area of a Rectangle Level 2

Help Chipmunk pick the rectangle with the largest area in square feet. Calculate the area of each rectangle, and then write the answer on the line. Color in the largest rectangle.



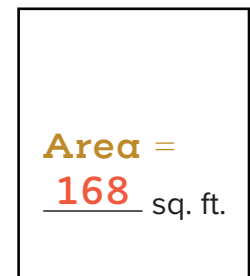
25 ft.

10 ft.



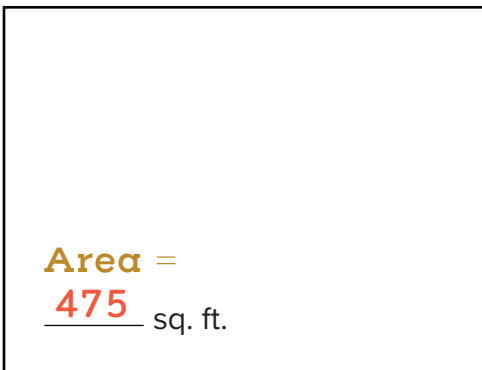
17 ft.

30 ft.



12 ft.

14 ft.



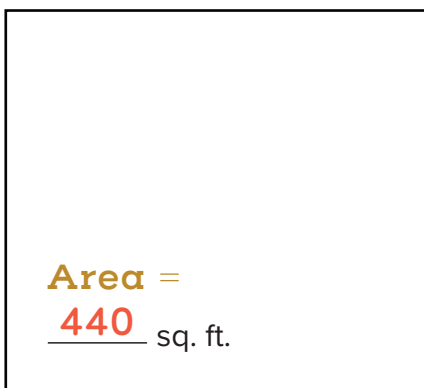
25 ft.

19 ft.




14 ft.

28 ft.



22 ft.

20 ft.



12 ft.

40 ft.