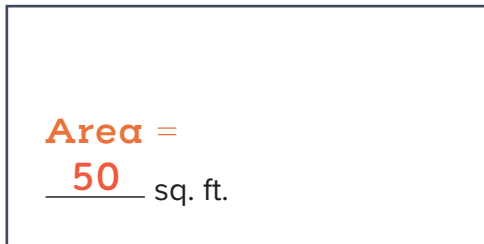


Name \_\_\_\_\_

Date \_\_\_\_\_

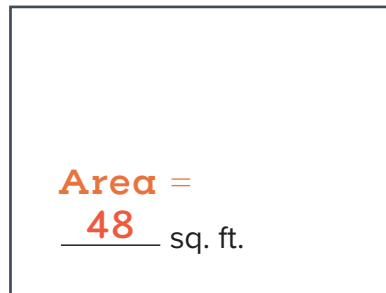
# Find the Area of a Rectangle Level 1

Help Fox pick the room with the largest area in square feet. Calculate the area of each room, and then write the answer on the line. Color in the largest room.



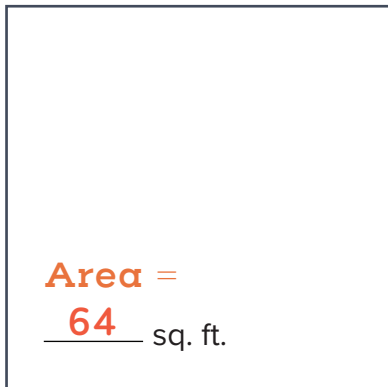
10 ft.

5 ft.



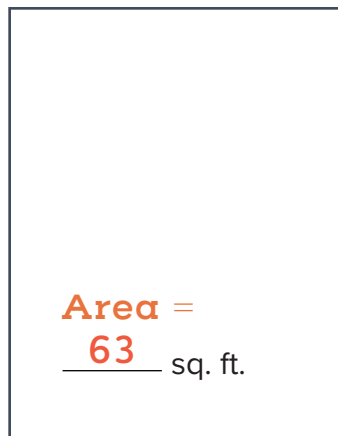
8 ft.

6 ft.




8 ft.

8 ft.




7 ft.

9 ft.



5 ft.

14 ft.



15 ft.

4 ft.