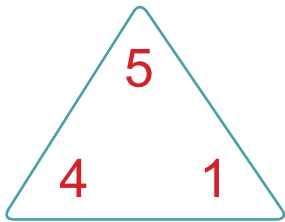
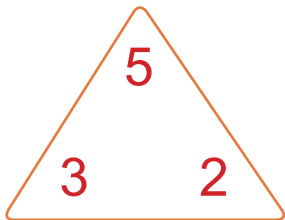



FACT FAMILY DICE

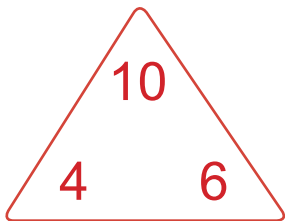

Add together the two dice to find the missing fact family number. Fill in the fact triangle using these numbers. Remember that the biggest number always sits at the top of the triangle! Then build your fact family number sentences using the blank lines.



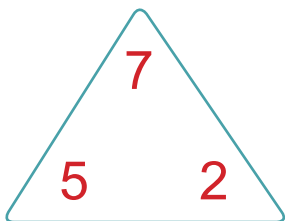

$$\begin{array}{r} 4 \\ \hline \end{array} + \begin{array}{r} 1 \\ \hline \end{array} = \begin{array}{r} 5 \\ \hline \end{array}$$
$$\begin{array}{r} 1 \\ \hline \end{array} + \begin{array}{r} 4 \\ \hline \end{array} = \begin{array}{r} 5 \\ \hline \end{array}$$



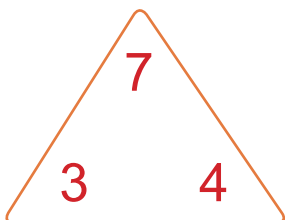

$$\begin{array}{r} 2 \\ \hline \end{array} + \begin{array}{r} 3 \\ \hline \end{array} = \begin{array}{r} 5 \\ \hline \end{array}$$
$$\begin{array}{r} 3 \\ \hline \end{array} + \begin{array}{r} 2 \\ \hline \end{array} = \begin{array}{r} 5 \\ \hline \end{array}$$



$$\begin{array}{r} 4 \\ \hline \end{array} + \begin{array}{r} 6 \\ \hline \end{array} = \begin{array}{r} 10 \\ \hline \end{array}$$
$$\begin{array}{r} 6 \\ \hline \end{array} + \begin{array}{r} 4 \\ \hline \end{array} = \begin{array}{r} 10 \\ \hline \end{array}$$



$$\begin{array}{r} 5 \\ \hline \end{array} + \begin{array}{r} 2 \\ \hline \end{array} = \begin{array}{r} 7 \\ \hline \end{array}$$
$$\begin{array}{r} 2 \\ \hline \end{array} + \begin{array}{r} 5 \\ \hline \end{array} = \begin{array}{r} 7 \\ \hline \end{array}$$



$$\begin{array}{r} 3 \\ \hline \end{array} + \begin{array}{r} 4 \\ \hline \end{array} = \begin{array}{r} 7 \\ \hline \end{array}$$
$$\begin{array}{r} 4 \\ \hline \end{array} + \begin{array}{r} 3 \\ \hline \end{array} = \begin{array}{r} 7 \\ \hline \end{array}$$

