



Family Circle

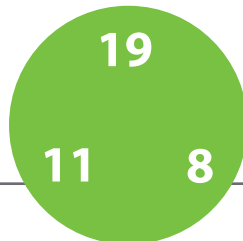
Each circle has three numbers that make up a **fact family**.
Add and subtract using each fact family to fill in the blanks.




$$\begin{array}{r} 9 + 8 = 17 \\ 8 + 9 = 17 \\ 17 - 8 = 9 \\ 17 - 9 = 8 \end{array}$$



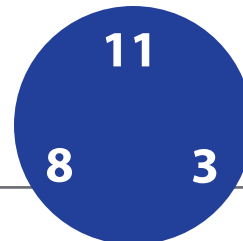
$$\begin{array}{r} 8 + 6 = 14 \\ 6 + 8 = 14 \\ 14 - 6 = 8 \\ 14 - 8 = 6 \end{array}$$




$$\begin{array}{r} 11 + 8 = 19 \\ 8 + 11 = 19 \\ 19 - 8 = 11 \\ 19 - 11 = 8 \end{array}$$




$$\begin{array}{r} 7 + 6 = 13 \\ 6 + 7 = 13 \\ 13 - 6 = 7 \\ 13 - 7 = 6 \end{array}$$




$$\begin{array}{r} 8 + 3 = 11 \\ 3 + 8 = 11 \\ 11 - 8 = 3 \\ 11 - 3 = 8 \end{array}$$



$$\begin{array}{r} 13 + 9 = 22 \\ 9 + 13 = 22 \\ 22 - 9 = 13 \\ 22 - 13 = 9 \end{array}$$



$$\begin{array}{r} 6 + 3 = 9 \\ 3 + 6 = 9 \\ 9 - 6 = 3 \\ 9 - 3 = 6 \end{array}$$



$$\begin{array}{r} 8 + 7 = 15 \\ 7 + 8 = 15 \\ 15 - 8 = 7 \\ 15 - 7 = 8 \end{array}$$