


Name: _____

Date: _____

Equal Groups Smoothies




Max and Sana are buying lots of fruit to make smoothies. Look at the arrays of fruit on the left, then fill in the blanks on the right to find out how much of each they will buy.




$$\underline{6} + \underline{6} + \underline{6} = \underline{18}$$

$$6 \times 3 = \underline{18}$$





$$\underline{6} + 6 = \underline{12}$$

$$\underline{2} \times \underline{6} = \underline{12}$$




$$\underline{5} + \underline{5} + \underline{5} = \underline{15}$$

$$\underline{3} \times \underline{5} = \underline{15}$$



$$\underline{5} + \underline{5} + \underline{5} + \underline{5} = \underline{20}$$

$$\underline{5} \times \underline{4} = \underline{20}$$



$$\underline{6} + \underline{6} + \underline{6} + \underline{6} = \underline{24}$$

$$4 \times \underline{6} = 24$$

