

# Elapsed Time

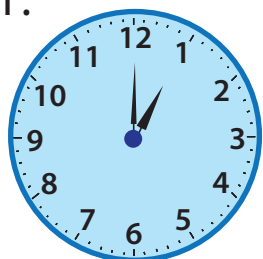
Now it is  
1 o'clock.



After one hour,  
it's 2 o'clock.

Draw clock hands to show the time one hour later. Write the time.

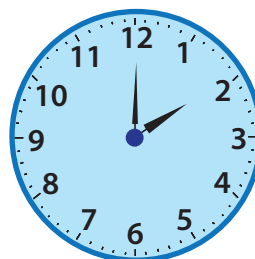
1. **NOW**




1 o'clock

2 o'clock

**LATER**



2.

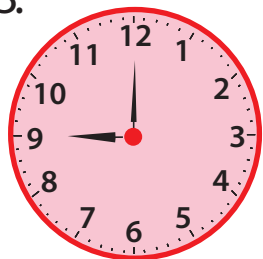


7 o'clock

8 o'clock




3.

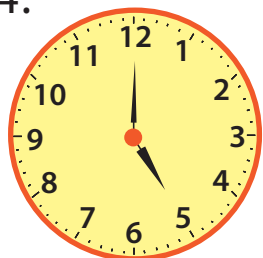


9 o'clock

10 o'clock



4.



5 o'clock

6 o'clock

