

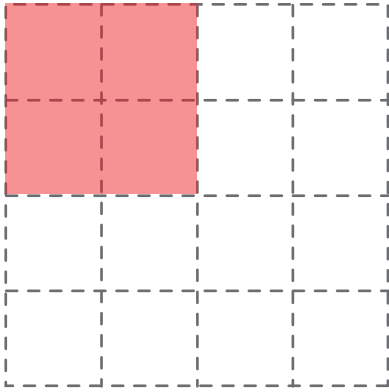
Name: _____

Date: _____

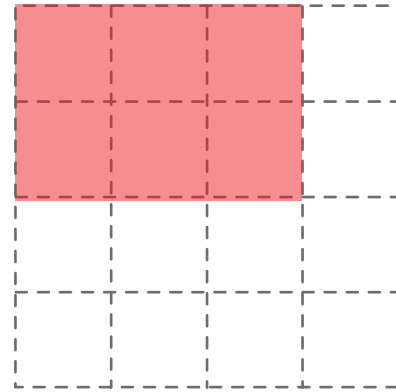
Draw the Array!

Directions: For each problem below, draw the array that represents it.
Then solve for the answer.


1. $2 \times 2 = 4$



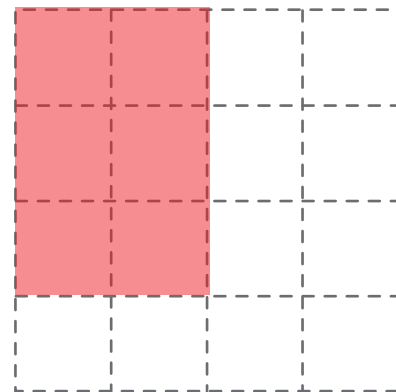
2. $2 \times 3 = 6$



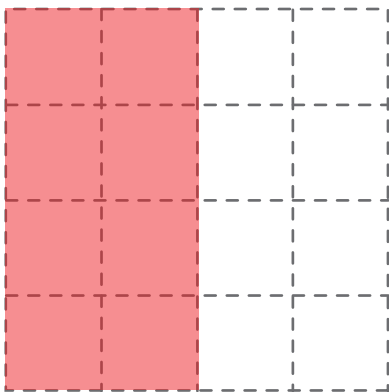
3. $3 \times 4 = 12$



4. $3 \times 2 = 6$



5. $4 \times 2 = 8$



6. $4 \times 3 = 12$

