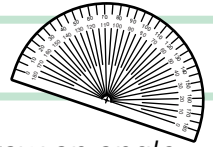


Name: \_\_\_\_\_

Date: \_\_\_\_\_



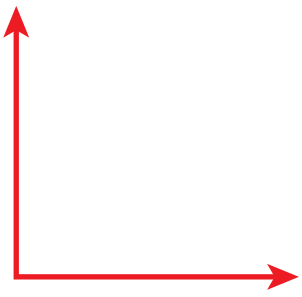




# ANSWERS

## Drawing Angles



**Directions:** There are four types of angles: acute, right, obtuse, and straight. Draw an angle or shape according to the directions.

### Sample Answers

<p>Obtuse Angle</p> 	<p>Acute Angle</p> 
<p>Right Angle</p> 	<p>Straight Angle</p> 
<p>Draw a shape that has <i>only</i> <u>right</u> angles</p> 	<p>Draw a shape that has <i>only</i> <u>acute</u> angles</p> 
<p>Draw a shape that has <i>both</i> an <u>obtuse</u> angle <i>and</i> an <u>acute</u> angle</p> 	<p>Draw a shape that has <i>no</i> angles</p> 