

Name \_\_\_\_\_


Date \_\_\_\_\_

## Draw Those Angles!

Shapes can have different numbers of angles! For each of the numbers below, draw a shape with that many angles.

### Sample Answers

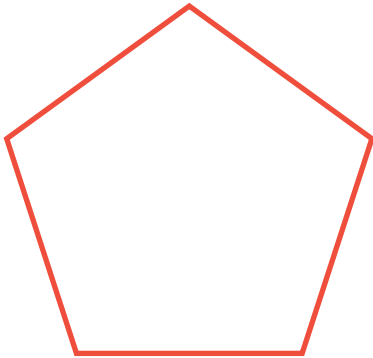
3 angles




4 angles



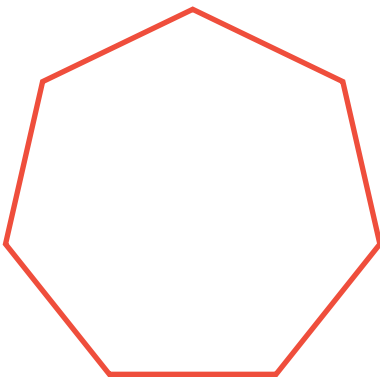
5 angles



6 angles



7 angles



8 angles

