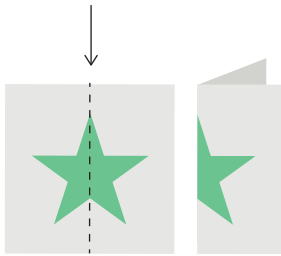


Draw a Line of Symmetry

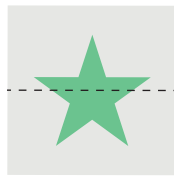
SYMMETRY

A figure has line symmetry if it can be folded into matching parts.
The fold line is called a **line of symmetry**.

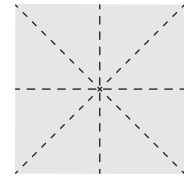
line of symmetry



not a line
of symmetry →



Some figures have more than one line of symmetry. This square has four lines of symmetry.



Draw a line of symmetry for each figure. **Sample Answers**

