



DOMINO FACT FAMILIES

Add the domino dots together to find a total. Then use these three numbers to build your fact family number sentences.




$$12 + 8 = 20 \quad 8 + 12 = 20$$

$$20 - 12 = 8 \quad 20 - 8 = 12$$




$$7 + 9 = 16 \quad 9 + 7 = 16$$

$$16 - 7 = 9 \quad 16 - 9 = 7$$




$$10 + 11 = 21 \quad 11 + 10 = 21$$

$$21 - 10 = 11 \quad 21 - 11 = 10$$




$$12 + 11 = 23 \quad 11 + 12 = 23$$

$$23 - 12 = 11 \quad 23 - 11 = 12$$



$$8 + 6 = 14 \quad 6 + 8 = 14$$

$$14 - 8 = 6 \quad 14 - 6 = 8$$



$$11 + 9 = 20 \quad 9 + 11 = 20$$

$$20 - 11 = 9 \quad 20 - 9 = 11$$