



# DOMINO FACT FAMILIES

Add the domino dots together to find a total. Then use these three numbers to build your fact family number sentences.



$$6 + 8 = 14 \quad 8 + 6 = 14$$

$$14 - 6 = 8 \quad 14 - 8 = 6$$




$$4 + 9 = 13 \quad 9 + 4 = 13$$

$$13 - 4 = 9 \quad 13 - 9 = 4$$




$$5 + 4 = 9 \quad 4 + 5 = 9$$

$$9 - 5 = 4 \quad 9 - 4 = 5$$




$$5 + 7 = 12 \quad 7 + 5 = 12$$

$$12 - 5 = 7 \quad 12 - 7 = 5$$



$$8 + 7 = 15 \quad 7 + 8 = 15$$

$$15 - 8 = 7 \quad 15 - 7 = 8$$



$$5 + 6 = 11 \quad 6 + 5 = 11$$

$$11 - 5 = 6 \quad 11 - 6 = 5$$