


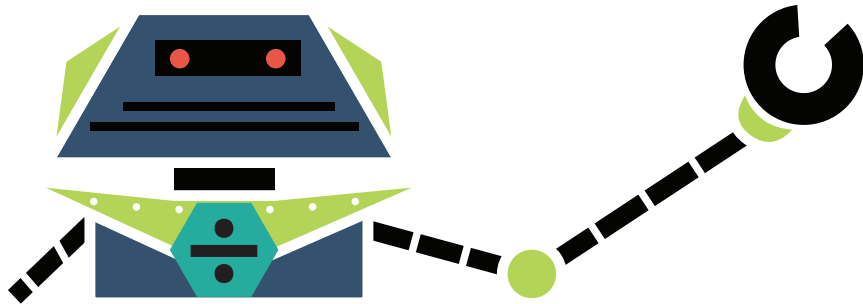
Division :

Division Word Problems




Use one of the following strategies when solving the following word problems:

- Draw an array
- Draw Equal Groups
- Repeated Subtraction
- Multiplication Sentence



Write the strategy you used on the line provided and show your work.

James has 15 cookies. He wants to divide them and give an equal number to his 3 friends. How many cookies should he give each friend?



$$\begin{array}{r} 15 \\ \underline{\quad} \end{array} \div \begin{array}{r} 3 \\ \underline{\quad} \end{array} = \begin{array}{r} 5 \\ \underline{\quad} \end{array}$$

_____ 5 _____ cookies

Samantha has 28 books. She wants to divide them and make 4 equal stacks to lend to her friends. How many books should she put in each stack?



$$\begin{array}{r} 28 \\ \underline{\quad} \end{array} \div \begin{array}{r} 4 \\ \underline{\quad} \end{array} = \begin{array}{r} 7 \\ \underline{\quad} \end{array}$$

_____ 7 _____ books

Mary is throwing a party. She has 20 soap hearts and wants to divide them equally into 5 party favor bags. How many soap hearts should she put in each bag?



$$\begin{array}{r} 20 \\ \underline{\quad} \end{array} \div \begin{array}{r} 5 \\ \underline{\quad} \end{array} = \begin{array}{r} 4 \\ \underline{\quad} \end{array}$$

_____ 4 _____ soap hearts