

Division :

Equal Groups: Division

In this drawing there are 5 equal groups of stars with 4 stars in each group. There are a total of 20 stars.



This division sentence shows how the 20 stars are divided into equal groups.

$$\begin{array}{ccc} \text{DIVIDEND} & \text{QUOTIENT} & \\ 20 \div 5 = 4 & & \\ \text{DIVISOR} & & \end{array}$$

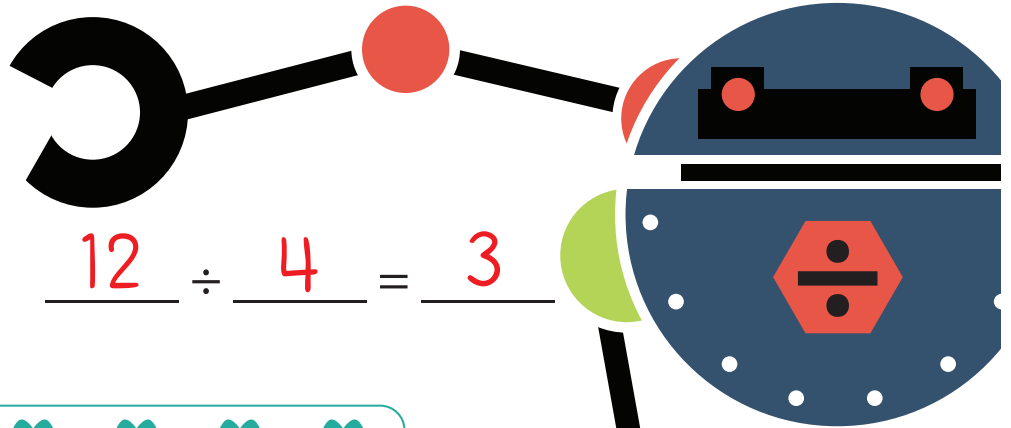

Dividend: total number of objects

Divisor: Number of equal groups

Quotient: Number of objects in each group


Directions: Now you try! Write a division sentence to represent each drawing.

1.



$$12 \div 4 = 3$$

2.



$$14 \div 2 = 7$$

3.



$$16 \div 4 = 4$$