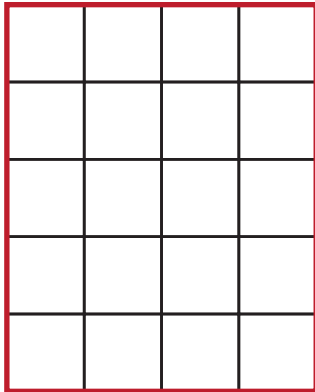



Divide it!

Partition each rectangle into columns and rows using snap cubes, square tiles, or squares.

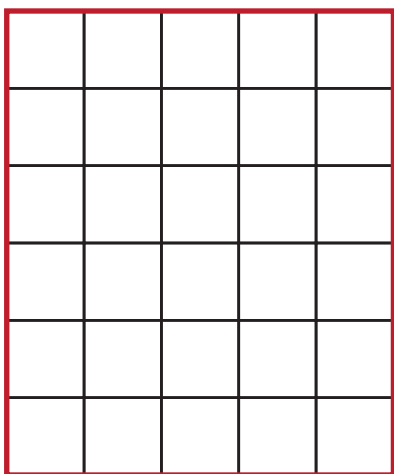
Name: _____




1) Partition this rectangle into 5 rows and 4 columns using your square tiles. How many total squares are there?



2) Partition this rectangle into 4 rows and 5 columns using your square tiles. How many total squares are there?



3) Partition this rectangle into 6 rows and 5 columns using your square tiles. How many total squares are there?



4) Partition this rectangle into 3 rows and 4 columns using your square tiles. How many total squares are there?