

Name _____

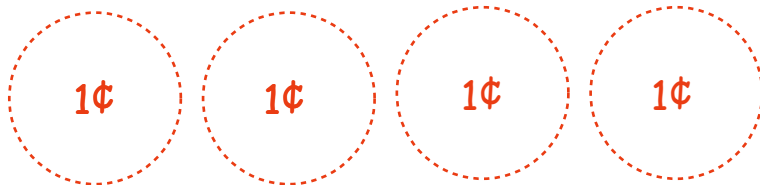
Date _____

Dime Word Problems *answers*



Solve the problems. Draw dimes and pennies to show your thinking.

Lola has 64¢. She finds 10¢ on the ground on her way to school. How much money does Lola have now?




Answer:
 $64 + 10 = 74¢$


Cylus has 37¢. Cylus loses 10¢ because it falls out of his pocket. How much money does Cylus have left?



Answer:
 $37 - 10 = 27¢$



Ms. Macias has 75¢. She buys a sticker for 10¢. How much money does she have left?



Answer:
 $75 - 10 = 65¢$