


Name \_\_\_\_\_


Date Answer Key

# Decompose 11-19: Tens and Ones #2


First, circle 10 ducks. Then, count how many more ducks there are. Last, write an equation to match the picture.



$$\overline{10} + \overline{3} = \overline{13}$$



$$\overline{10} + \overline{7} = \overline{17}$$



$$\overline{10} + \overline{4} = \overline{14}$$