


Name _____


Date Answer Key

Decompose 11-19: Tens and Ones #1


First, circle 10 frogs. **Then**, count how many more frogs there are. **Last**, write an equation to match the picture.



$$\underline{10} + \underline{5} = \underline{15}$$



$$\underline{10} + \underline{2} = \underline{12}$$



$$\underline{10} + \underline{6} = \underline{16}$$