
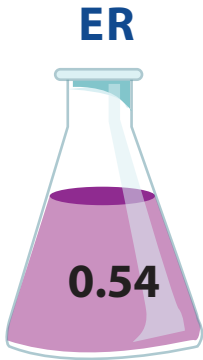
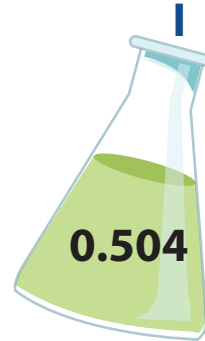



ANSWER SHEET

4th
Grade

Beaker Puzzle: Practice Ordering Decimals

Order the decimal numbers on the beakers from largest to smallest, then use the letters to answer the question below.



E

X

P

ER

I

M

EN

T

1.10

1.01

1.0

0.54

0.504

0.44

0.405

0.145

What do scientists do?

EXPERIMENT