


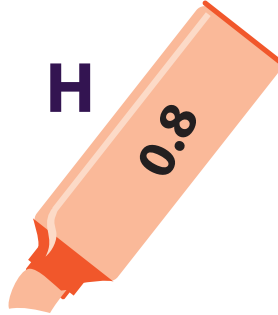


ANSWER SHEET

4th
Grade

Marker Puzzle: Practice Ordering Decimals

Order the decimal numbers on the markers from largest to smallest, then use the letters to answer the question below.



E

M

P

H

A

S

I

ZE

0.973

0.96

0.89

0.8

0.78

0.72

0.68

0.264

What do markers help us do?

EMPHASIZE