



Name _____



Date _____



Answer Key



Addition Within 10: Avocados



Add. Use the pictures to help you. The first problem has been done for you.

$$\begin{array}{r} 1 \text{  \\ + 2 \text{  \\ \hline 3 \end{array}$$

$$\begin{array}{r} 2 \text{  \\ + 4 \text{  \\ \hline 6 \end{array}$$



$$\begin{array}{r} 3 \text{  \\ + 1 \text{  \\ \hline 4 \end{array}$$



$$\begin{array}{r} 1 \text{  \\ + 1 \text{  \\ \hline 2 \end{array}$$

$$\begin{array}{r} 3 \text{  \\ + 4 \text{  \\ \hline 7 \end{array}$$

$$\begin{array}{r} 2 \text{  \\ + 5 \text{  \\ \hline 7 \end{array}$$



$$\begin{array}{r} 3 \text{  \\ + 5 \text{  \\ \hline 8 \end{array}$$



$$\begin{array}{r} 2 \text{  \\ + 7 \text{  \\ \hline 9 \end{array}$$



$$\begin{array}{r} 6 \text{  \\ + 2 \text{  \\ \hline 8 \end{array}$$

$$\begin{array}{r} 5 \text{  \\ + 3 \text{  \\ \hline 8 \end{array}$$

$$\begin{array}{r} 5 \text{  \\ + 2 \text{  \\ \hline 7 \end{array}$$

$$\begin{array}{r} 4 \text{  \\ + 6 \text{  \\ \hline 10 \end{array}$$

$$\begin{array}{r} 1 \text{  \\ + 8 \text{  \\ \hline 9 \end{array}$$

$$\begin{array}{r} 3 \text{  \\ + 3 \text{  \\ \hline 6 \end{array}$$

$$\begin{array}{r} 5 \text{  \\ + 4 \text{  \\ \hline 9 \end{array}$$