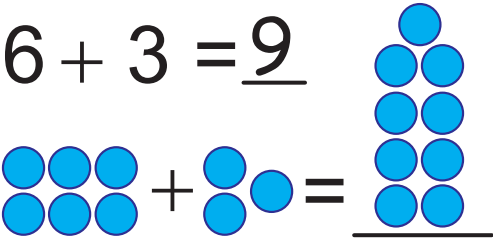


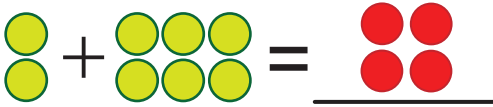
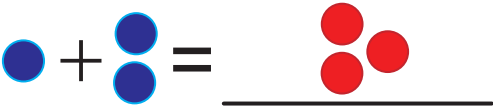





Answer Key

Practice Your Addition, 1 to 10 - Grid #28

★ Add the two numbers together for each problem. Write your answer in the blank space. Then add up the shapes and draw the answer. See Example 1.

Example 1. $6 + 3 = \underline{9}$ 	2. $3 + 1 = \underline{4}$ 
3. $2 + 3 = \underline{5}$ 	4. $2 + 6 = \underline{8}$ 
5. $1 + 2 = \underline{3}$ 	6. $7 + 1 = \underline{8}$ 
7. $2 + 4 = \underline{6}$ 	8. $2 + 2 = \underline{4}$ 

★ You can make up your own addition problems on the back of this page. You can make up your own shapes too. Don't forget to color them in!