
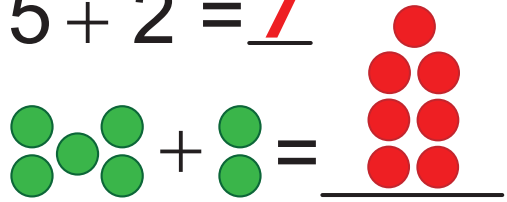
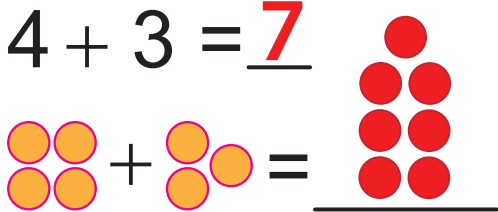
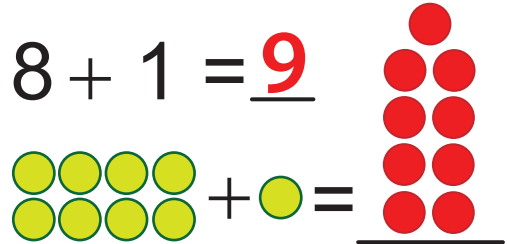
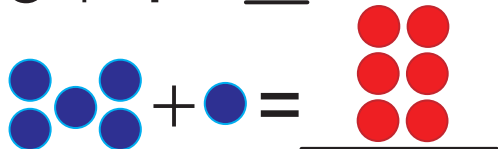

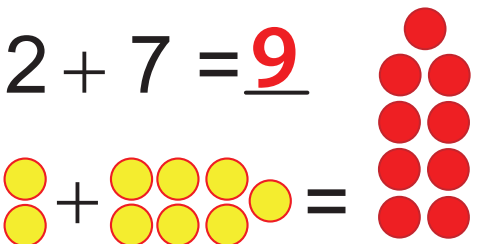



Answer Key

Practice Your Addition, 1 to 10 - Grid #24

★ Add the two numbers together for each problem. Write your answer in the blank space. Then add up the shapes and draw the answer. See Example 1.

Example 1. $3 + 1 = \underline{4}$ 	2. $5 + 2 = \underline{7}$ 
3. $4 + 3 = \underline{7}$ 	4. $8 + 1 = \underline{9}$ 
5. $5 + 1 = \underline{6}$ 	6. $1 + 5 = \underline{6}$ 
7. $2 + 7 = \underline{9}$ 	8. $1 + 2 = \underline{3}$ 

★ You can make up your own addition problems on the back of this page. You can make up your own shapes too. Don't forget to color them in!