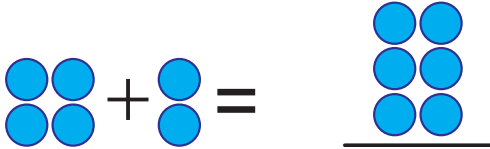

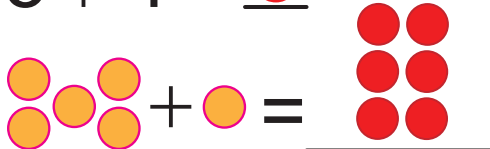
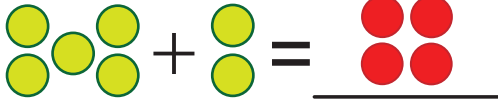






Answer Key

Practice Your Addition, 1 to 10 - Grid #12

★ Add the two numbers together for each problem. Write your answer in the blank space. Then add up the shapes and draw the answer. See Example 1.

<p>Example 1.</p> $4 + 2 = \underline{6}$ 	<p>2.</p> $2 + 3 = \underline{5}$ 
<p>3.</p> $5 + 1 = \underline{6}$ 	<p>4.</p> $5 + 2 = \underline{7}$ 
<p>5.</p> $3 + 4 = \underline{7}$ 	<p>6.</p> $2 + 1 = \underline{3}$ 
<p>7.</p> $4 + 3 = \underline{7}$ 	<p>8.</p> $1 + 5 = \underline{6}$ 

★ You can make up your own addition problems on the back of this page. You can make up your own shapes too. Don't forget to color them in!