


Name: _____

Date: _____


Answer Sheet
(Answers may vary.)

Compose Within 20


Complete the number bonds and number sentences. The first one is done for you.




$$10 + 2 = \underline{12}$$




$$6 + 4 = \underline{10}$$




$$17 + 3 = \underline{20}$$




$$7 + 5 = \underline{12}$$




$$8 + 9 = \underline{17}$$




$$13 + 2 = \underline{15}$$




$$8 + 7 = \underline{15}$$




$$15 + 4 = \underline{19}$$




$$7 + 7 = \underline{14}$$



$$13 + 5 = \underline{18}$$



$$6 + 9 = \underline{15}$$



$$9 + 9 = \underline{18}$$


Name: _____

Date: _____


Answer Sheet
(Answers may vary.)

Decompose Within 20


Complete the number bonds and number sentences. The first one is done for you.



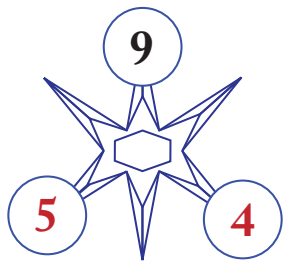
$$\underline{10} + \underline{9} = 19$$




$$\underline{10} + \underline{5} = 15$$




$$\underline{10} + \underline{1} = 11$$




$$\underline{5} + \underline{4} = 9$$



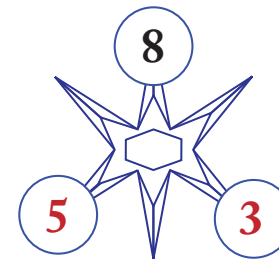
$$\underline{10} + \underline{3} = 13$$




$$\underline{5} + \underline{5} = 10$$




$$\underline{10} + \underline{7} = 17$$



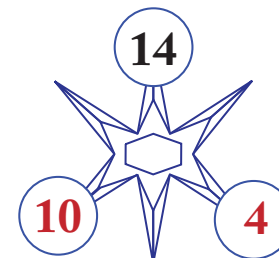
$$\underline{5} + \underline{3} = 8$$




$$\underline{10} + \underline{2} = 12$$



$$\underline{10} + \underline{6} = 16$$



$$\underline{10} + \underline{4} = 14$$



$$\underline{10} + \underline{10} = 20$$