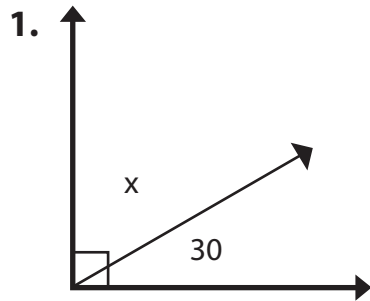
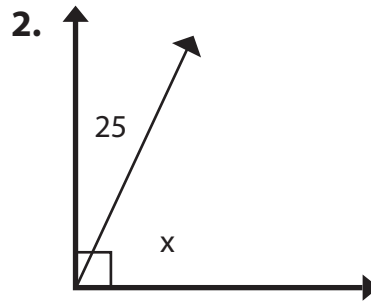


# Complementary Angles

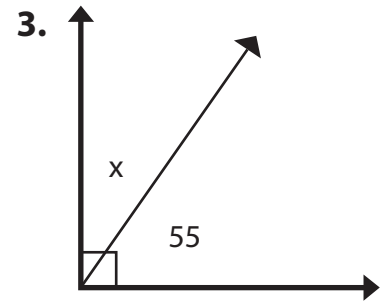
Solve for angle x.



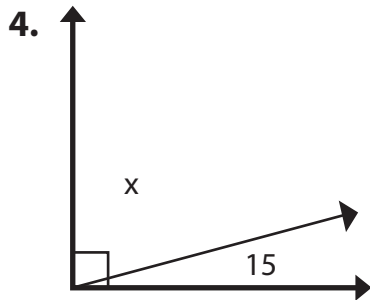
$$x = \underline{60}^\circ$$
$$(90 - 30 = 60)$$



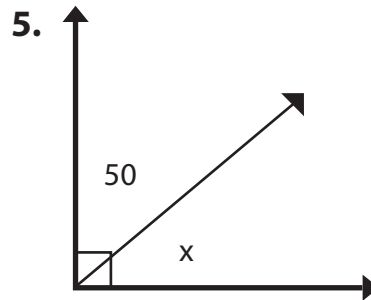
$$x = \underline{65}^\circ$$



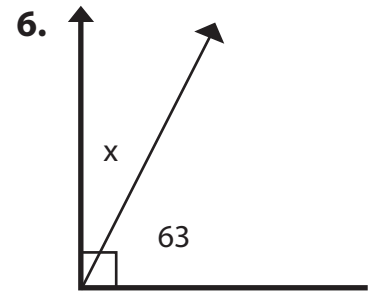
$$x = \underline{35}^\circ$$



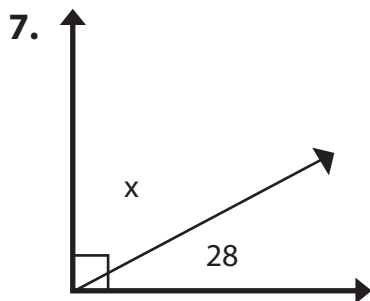
$$x = \underline{75}^\circ$$



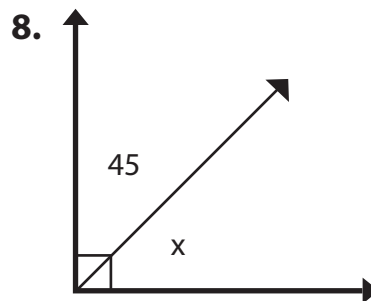
$$x = \underline{40}^\circ$$



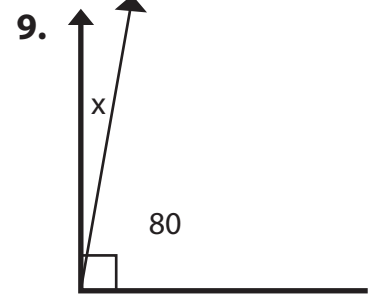
$$x = \underline{27}^\circ$$



$$x = \underline{62}^\circ$$



$$x = \underline{45}^\circ$$



$$x = \underline{10}^\circ$$