





















What is the Total Price?

(answer sheet)

Using the number above each coin, enter the total of that coin in the space provided below the coin. Then add the amounts below the coins to calculate the price of the item pictured.

4	2	0	8	\$ 2 . 24	
					
<u>.04</u>	<u>.20</u>	<u>0</u>	<u>2.00</u>		
3	1	1	16	\$ 4 . 18	
					
<u>.03</u>	<u>.10</u>	<u>.05</u>	<u>4.00</u>		
8	0	3	14	\$ 3 . 73	
					
<u>.08</u>	<u>0</u>	<u>.15</u>	<u>3.50</u>		
2	4	2	3	\$ 1 . 27	
					
<u>.02</u>	<u>.40</u>	<u>.10</u>	<u>.75</u>		