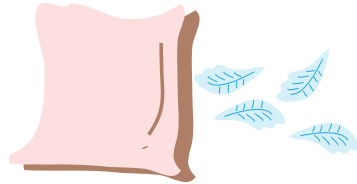



Choose The Unit: Weight

Which measurement would you use for each item? Choose the correct one from the word bank below and write it down to complete the sentence.

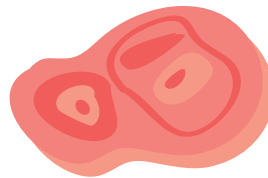
tons pounds
pounds ounce tons



This pillow has a half ounce of feathers.



This dog weighs 10 pounds.



We grilled 3 pounds of meat.



This car weighs 2 tons.



This airplane weighs 350 tons.