




Calculating Area at the Zoo




Name: _____

Date: _____

Find the area of each animal enclosure at the zoo. **Remember:** Area= Length x Width

ANSWERS


53 ft.



A= 2,014 square ft.

38 ft.


24 ft.




A= 2,328 square ft.

97 ft.

19 ft.




A= 361 square ft.



72 ft.


16 ft.



A= 944 square ft.


59 ft.

31 ft.



A= 961 square ft.

31 ft.




A= 3,384 square ft.

47 ft.

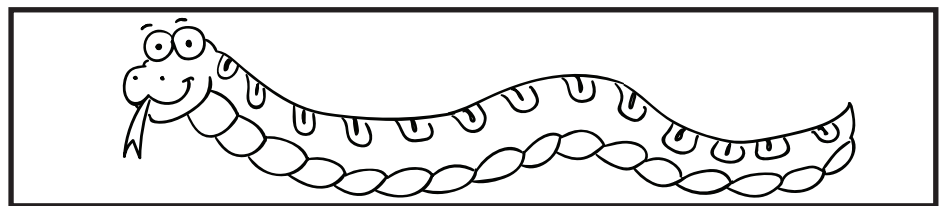
84 ft.

25 ft.



A= 1,625 square ft.

65 ft.




A= 1,008 square ft.

12 ft.



29 ft.



A= 754 square ft.

26 ft.