

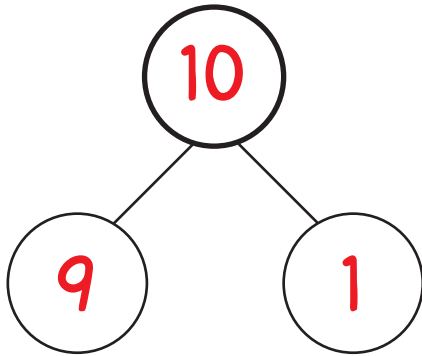
Name: _____

Date: _____

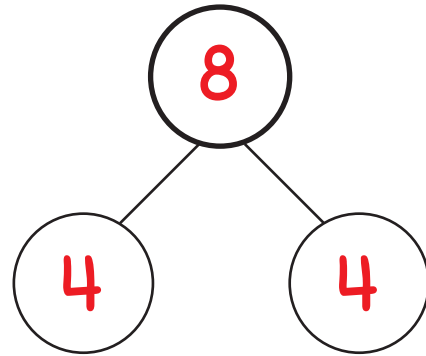
Answers **Build Your Own Number Bond**

Use number bonds to solve these equations. Fill in the numbers you know and figure out the missing numbers by solving the problems.

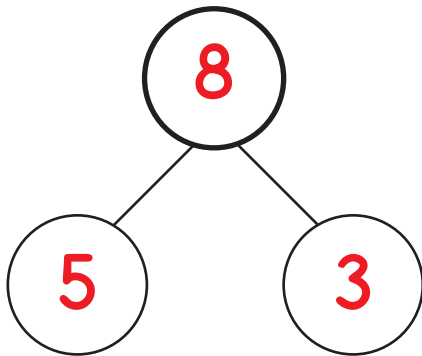
1. $9 + 1 = \underline{\quad 10 \quad}$



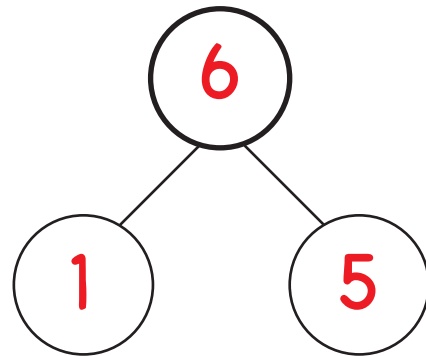
2. $4 + 4 = \underline{\quad 8 \quad}$



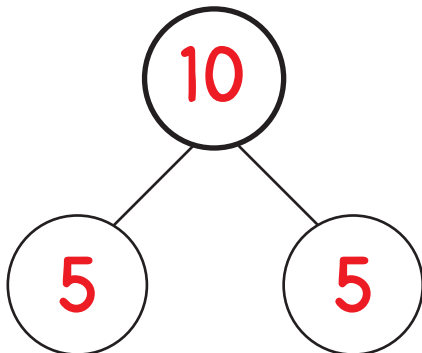
3. $5 + 3 = \underline{\quad 8 \quad}$



4. $1 + 5 = \underline{\quad 6 \quad}$



5. $5 + 5 = \underline{\quad 10 \quad}$



6. $2 + 3 = \underline{\quad 5 \quad}$

