




Name _____




Date _____






Answer Key





Addition Within 10: Apples






Add. Use the pictures to help you. The first problem has been done for you.

$$\begin{array}{r} 1 \text{  \\ + 2 \text{   \\ \hline 3 \end{array}$$

$$\begin{array}{r} 3 \text{    \\ + 0 \\ \hline 3 \end{array}$$








$$\begin{array}{r} 4 \text{     \\ + 1 \text{  \\ \hline 5 \end{array}$$







$$\begin{array}{r} 2 \text{   \\ + 2 \text{   \\ \hline 4 \end{array}$$











$$\begin{array}{r} 3 \text{    \\ + 2 \text{   \\ \hline 5 \end{array}$$









$$\begin{array}{r} 1 \text{  \\ + 5 \text{      \\ \hline 6 \end{array}$$









$$\begin{array}{r} 5 \text{      \\ + 5 \text{      \\ \hline 10 \end{array}$$









$$\begin{array}{r} 2 \text{   \\ + 5 \text{      \\ \hline 7 \end{array}$$











$$\begin{array}{r} 3 \text{    \\ + 3 \text{    \\ \hline 6 \end{array}$$








$$\begin{array}{r} 6 \text{       \\ + 4 \text{     \\ \hline 10 \end{array}$$

$$\begin{array}{r} 5 \text{      \\ + 3 \text{    \\ \hline 8 \end{array}$$

$$\begin{array}{r} 2 \text{   \\ + 7 \text{       \\ \hline 9 \end{array}$$

$$\begin{array}{r} 4 \text{     \\ + 4 \text{     \\ \hline 8 \end{array}$$

$$\begin{array}{r} 8 \text{         \\ + 2 \text{   \\ \hline 10 \end{array}$$

$$\begin{array}{r} 4 \text{     \\ + 3 \text{    \\ \hline 7 \end{array}$$