





BASKETBALL DIVISION #5

Ready to take the court and run a fast break to learning? Solve the following division problems and you'll be an All-Star!

★ ☆ ★
 $10 \div 1 = \underline{10}$




★ ☆ ★
 $15 \div 3 = \underline{5}$




★ ☆ ★
 $6 \div 2 = \underline{3}$




★ ☆ ★
 $32 \div 8 = \underline{4}$




★ ☆ ★
 $18 \div 9 = \underline{2}$




★ ☆ ★
 $24 \div 4 = \underline{6}$




★ ☆ ★
 $16 \div 8 = \underline{2}$




★ ☆ ★
 $14 \div 2 = \underline{7}$




★ ☆ ★
 $33 \div 3 = \underline{11}$



★ ☆ ★
 $8 \div 2 = \underline{4}$



★ ☆ ★
 $12 \div 6 = \underline{2}$



★ ☆ ★
 $45 \div 5 = \underline{9}$

