




BASKETBALL DIVISION #4

Ready to take the court and run a fast break to learning? Solve the following division problems and you'll be an All-Star!


★ ☆ ★
 $6 \div 3 = \underline{2}$




★ ☆ ★
 $16 \div 4 = \underline{4}$




★ ☆ ★
 $30 \div 3 = \underline{10}$




★ ☆ ★
 $12 \div 6 = \underline{2}$




★ ☆ ★
 $22 \div 2 = \underline{11}$




★ ☆ ★
 $14 \div 7 = \underline{2}$




★ ☆ ★
 $49 \div 7 = \underline{7}$




★ ☆ ★
 $35 \div 7 = \underline{5}$




★ ☆ ★
 $12 \div 4 = \underline{3}$



★ ☆ ★
 $4 \div 2 = \underline{2}$



★ ☆ ★
 $10 \div 5 = \underline{2}$



★ ☆ ★
 $8 \div 2 = \underline{4}$

