





BASKETBALL DIVISION #2

Ready to take the court and run a fast break to learning? Solve the following division problems and you'll be an All-Star!


★ ☆ ★
 $6 \div 3 = \underline{2}$




★ ☆ ★
 $10 \div 1 = \underline{10}$




★ ☆ ★
 $35 \div 7 = \underline{5}$




★ ☆ ★
 $12 \div 6 = \underline{2}$




★ ☆ ★
 $27 \div 3 = \underline{9}$




★ ☆ ★
 $25 \div 5 = \underline{5}$




★ ☆ ★
 $14 \div 7 = \underline{2}$



★ ☆ ★
 $21 \div 3 = \underline{7}$




★ ☆ ★
 $12 \div 3 = \underline{4}$



★ ☆ ★
 $3 \div 1 = \underline{3}$



★ ☆ ★
 $48 \div 8 = \underline{6}$



★ ☆ ★
 $9 \div 3 = \underline{3}$

