




# BASKETBALL DIVISION #1

Ready to take the court and run a fast break to learning? Solve the following division problems and you'll be an All-Star!


★ ☆ ★  
 $8 \div 8 = \underline{1}$




★ ☆ ★  
 $20 \div 2 = \underline{10}$




★ ☆ ★  
 $48 \div 6 = \underline{8}$




★ ☆ ★  
 $12 \div 6 = \underline{2}$




★ ☆ ★  
 $15 \div 3 = \underline{5}$




★ ☆ ★  
 $21 \div 7 = \underline{3}$




★ ☆ ★  
 $18 \div 3 = \underline{6}$




★ ☆ ★  
 $14 \div 2 = \underline{7}$




★ ☆ ★  
 $10 \div 2 = \underline{5}$



★ ☆ ★  
 $6 \div 1 = \underline{6}$



★ ☆ ★  
 $20 \div 4 = \underline{5}$



★ ☆ ★  
 $40 \div 5 = \underline{8}$

