

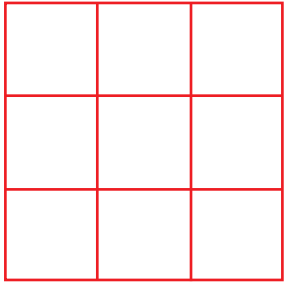
Name: \_\_\_\_\_

Date: \_\_\_\_\_


## Draw the Array without Grids!

Directions: For each problem below, draw the array that represents it.  
Then solve for the answer.


$$3 \times 3 = \underline{9}$$




$$5 \times 2 = \underline{10}$$



$$4 \times 5 = \underline{20}$$



$$2 \times 4 = \underline{8}$$



$$4 \times 4 = \underline{16}$$

