


Describe the Array


Hint:

Row



Remember that a row is a horizontal line of objects


1.



How many rows of cars are there? 4

How many cars are in each row? 3


2.



How many rows of cars are there? 6

How many cars are in each row? 2


3.



How many rows of cars are there? 3


How many cars are in each row? 7

4.




How many rows of cars are there? 4
How many cars are in each row? 6

5.



How many rows of cars are there? 8
How many cars are in each row? 2

6.



How many rows of cars are there? 3
How many cars are in each row? 5