

Name _____

Name _____

Area of Rectangular Rooms

Area is the measurement of the square units inside a shape.


Use the equation to find area:


$$\text{Length} \times \text{Width} = \text{Area}$$


Directions: Calculate the area of the rooms below.
The first problem has been done for you!





Example:


9 units
 2 units
 Length: 9 units
 Width: 2 units
 Area: 18 square units

1. 10 units
 8 units
 Length: 10 units
 Width: 8 units
 Area: 80 square units

2. 6 units
 2 units
 Length: 6 units
 Width: 2 units
 Area: 12 square units

3. 3 units
 7 units
 Length: 7 units
 Width: 3 units
 Area: 21 square units

4. 8 units
 9 units
 Length: 9 units
 Width: 8 units
 Area: 72 square units

5. 4 units
 5 units
 Length: 5 units
 Width: 4 units
 Area: 20 square units