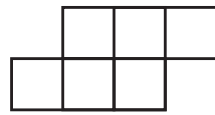


Answer Key**Area: Counting Unit Squares**

Area is the measurement of the square units inside a shape. Each square inside the shape is 1 square unit.

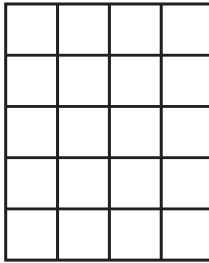


Area: 6 square units



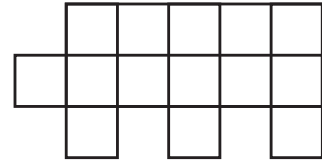
Directions: Find the area of the shape by counting the square units.

1.



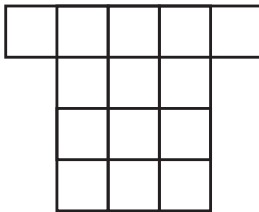
Area: 20 square units

2.



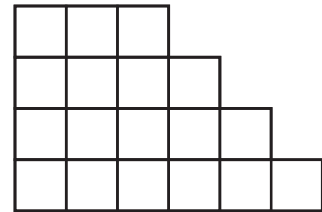
Area: 14 square units

3.




Area: 14 square units

4.




Area: 18 square units

5.



Area: 12 square units

6.




Area: 16 square units

Name: _____

Date: _____

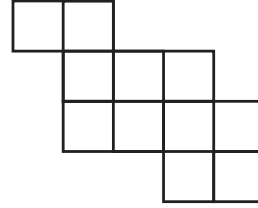
Answer Key

7.



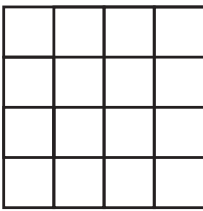
Area: **28** square units

8.




Area: **11** square units

9.



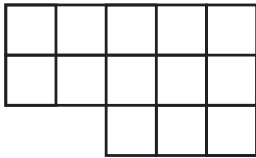
Area: **16** square units

10.



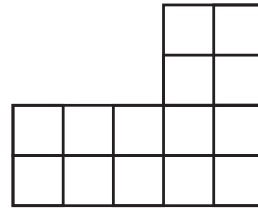
Area: **18** square units

11.



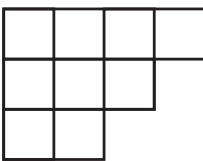
Area: **13** square units

12.



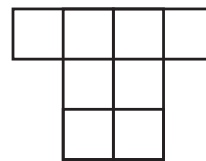
Area: **14** square units

13.



Area: **9** square units

14.



Area: **8** square units